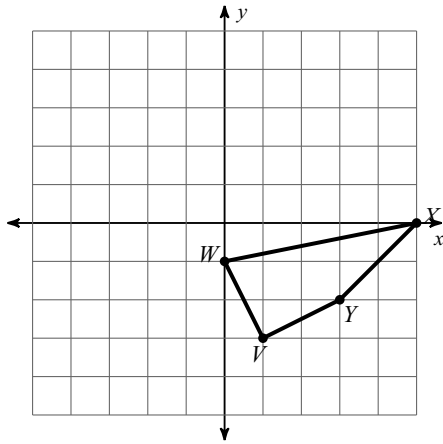


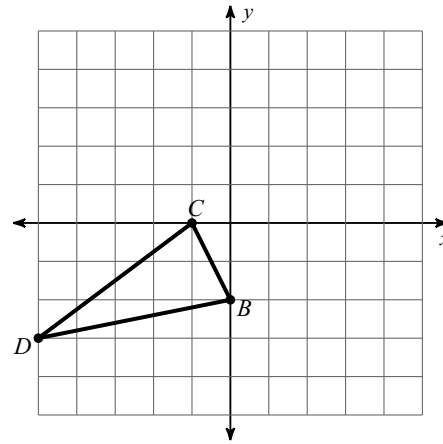
Warm Up

Graph the image of the figure using the transformation given.

1) reflection across $x = 2$



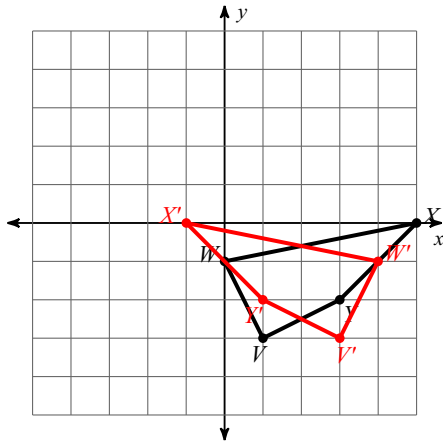
2) reflection across $y = 1$



Warm Up

Graph the image of the figure using the transformation given.

1) reflection across $x = 2$



2) reflection across $y = 1$

