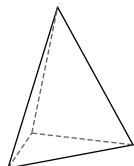


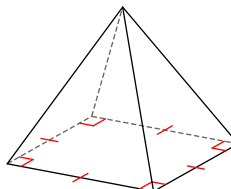
Volume Quiz Review

Name each figure.

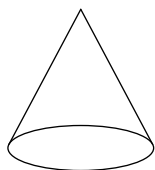
1)



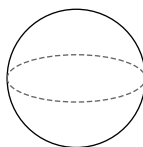
2)



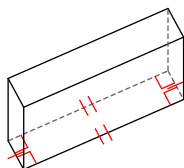
3)



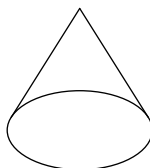
4)



5)

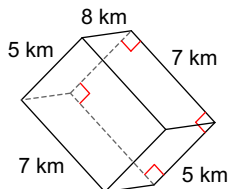


6)

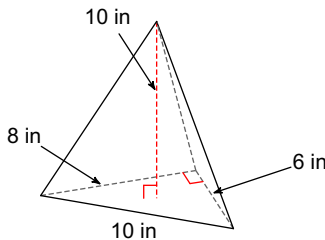


Find the volume of each figure. Round your answers to the nearest hundredth, if necessary.

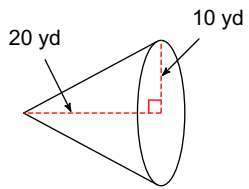
7)



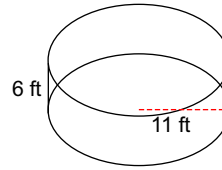
8)



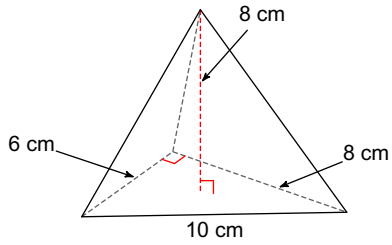
9)



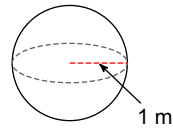
10)



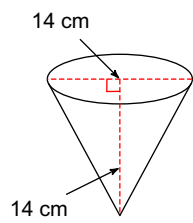
11)



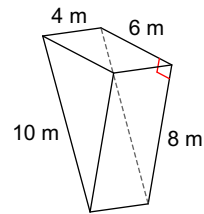
12)



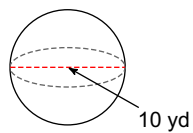
13)



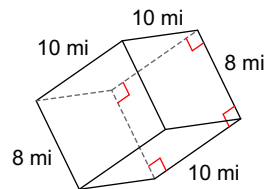
14)



15)



16)



Answers to Volume Quiz Review (ID: 1)

- | | | | |
|---------------------------|---------------------------|--------------------------|------------------------|
| 1) triangular pyramid | 2) square pyramid | 3) cone | 4) sphere |
| 5) rectangular prism | 6) cone | 7) 280 km^3 | 8) 80 in^3 |
| 9) 2094.4 yd^3 | 10) 2280.8 ft^3 | 11) 64 cm^3 | 12) 4.19 m^3 |
| 13) 718.38 cm^3 | 14) 96 m^3 | 15) 523.6 yd^3 | 16) 800 mi^3 |