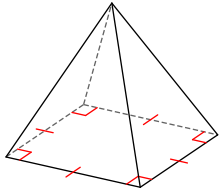


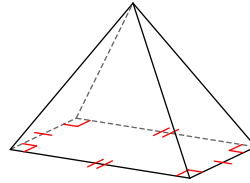
Volume Pyramid

Name each figure.

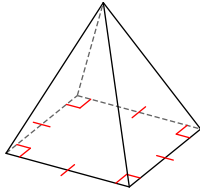
1)



2)



3)

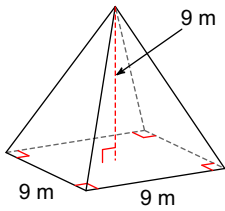


4)

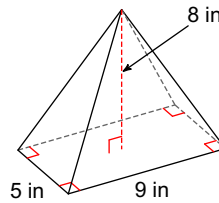


Find the volume of each figure. Round your answers to the nearest hundredth, if necessary.

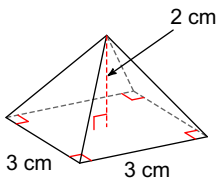
5)



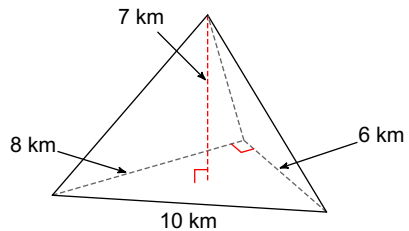
6)

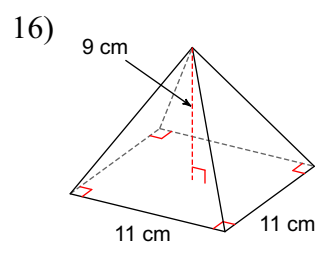
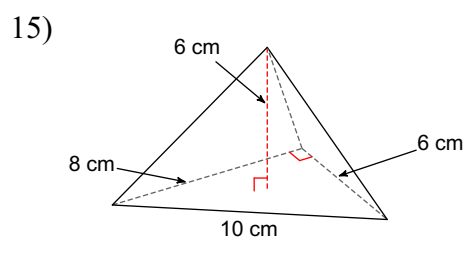
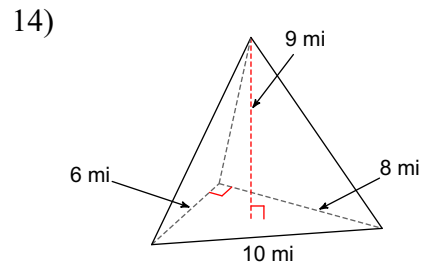
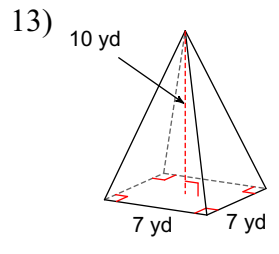
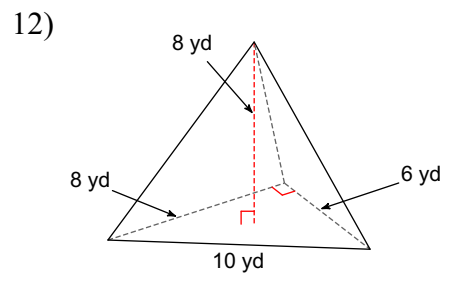
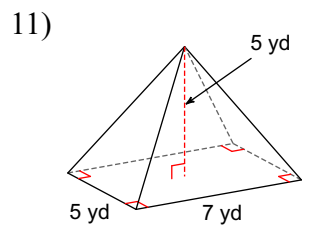
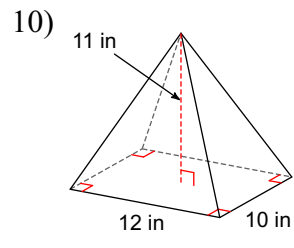
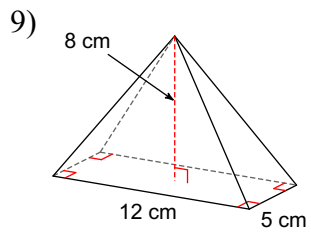


7)



8)





Answers to Volume Pyramid (ID: 1)

- | | | | |
|---------------------------|------------------------|--------------------------|------------------------|
| 1) square pyramid | 2) rectangular pyramid | 3) square pyramid | 4) triangular pyramid |
| 5) 243 m^3 | 6) 120 in^3 | 7) 6 cm^3 | 8) 56 km^3 |
| 9) 160 cm^3 | 10) 440 in^3 | 11) 58.33 yd^3 | 12) 64 yd^3 |
| 13) 163.33 yd^3 | 14) 72 mi^3 | 15) 48 cm^3 | 16) 363 cm^3 |