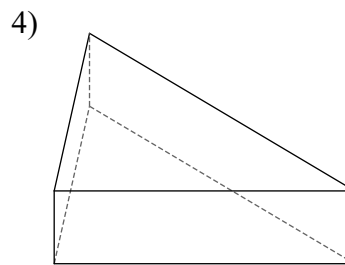
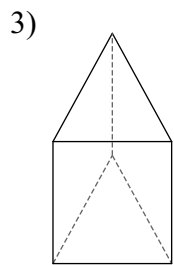
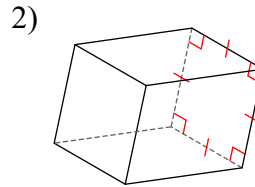
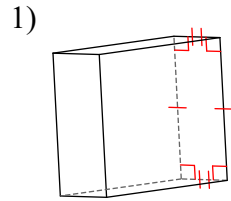
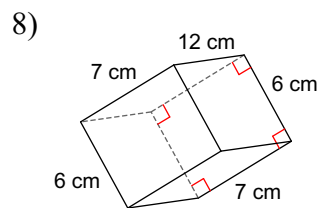
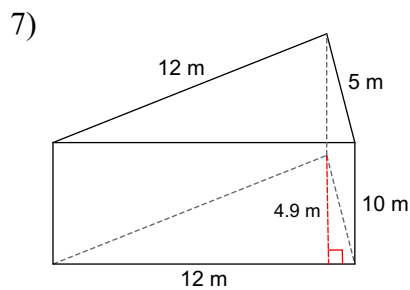
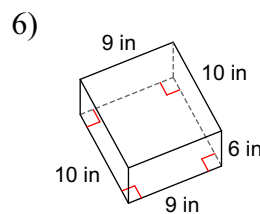
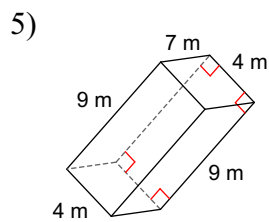


Volume Prisms

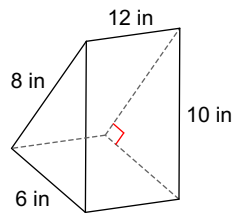
Name each figure.



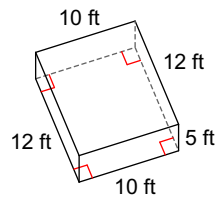
Find the volume of each figure. Round your answers to the nearest hundredth, if necessary.



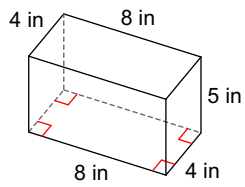
9)



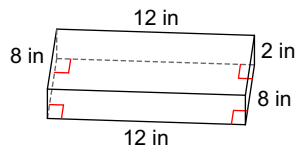
10)



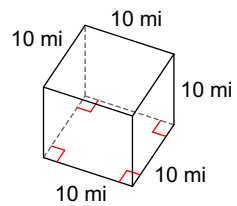
11)



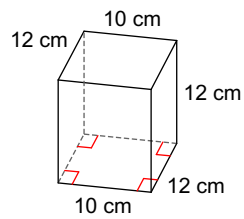
12)



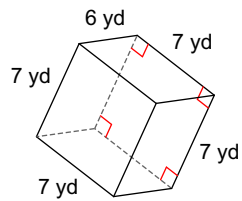
13)



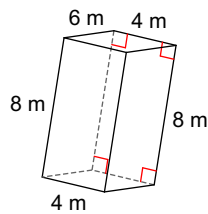
14)



15)



16)



Answers to Volume Prisms (ID: 1)

- | | | | |
|-------------------------|-------------------------|------------------------|------------------------|
| 1) rectangular prism | 2) square prism | 3) triangular prism | 4) triangular prism |
| 5) 252 m^3 | 6) 540 in^3 | 7) 294 m^3 | 8) 504 cm^3 |
| 9) 288 in^3 | 10) 600 ft^3 | 11) 160 in^3 | 12) 192 in^3 |
| 13) 1000 mi^3 | 14) 1440 cm^3 | 15) 294 yd^3 | 16) 192 m^3 |