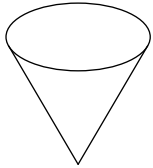


Volume Cones

Name each figure.

1)

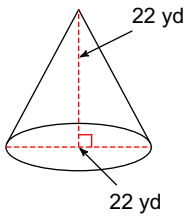


2)

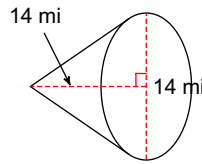


Find the volume of each figure. Round your answers to the nearest hundredth, if necessary.

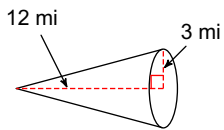
3)



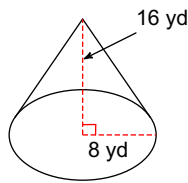
4)



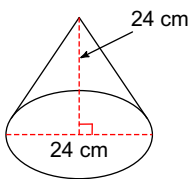
5)



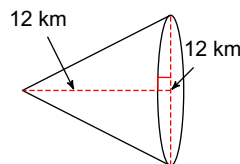
6)



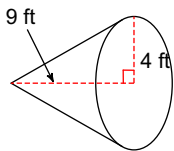
7)



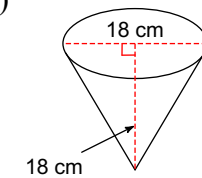
8)



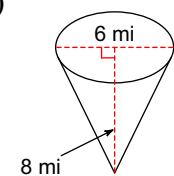
9)



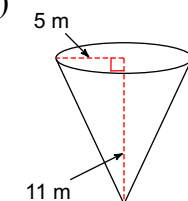
10)



11)



12)



Answers to Volume Cones (ID: 1)

1) cone

5) 113.1 mi^3

9) 150.8 ft^3

2) cone

6) 1072.33 yd^3

10) 1526.81 cm^3

3) 2787.64 yd^3

7) 3619.11 cm^3

11) 75.4 mi^3

4) 718.38 mi^3

8) 452.39 km^3

12) 287.98 m^3