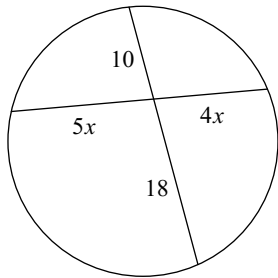


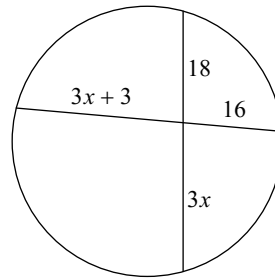
Unit 9b Quiz Review

Solve for x . Assume that lines which appear tangent are tangent.

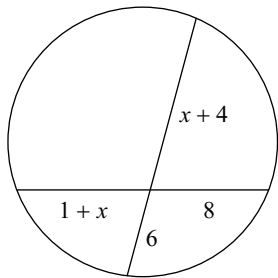
1)



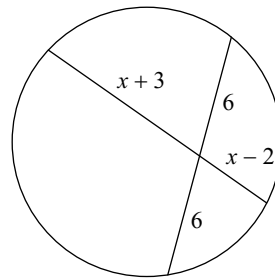
2)



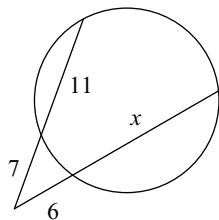
3)



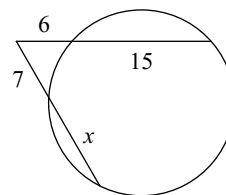
4)



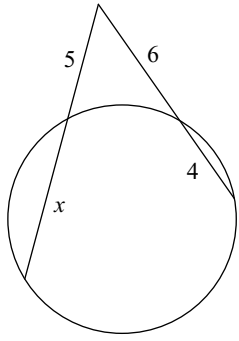
5)



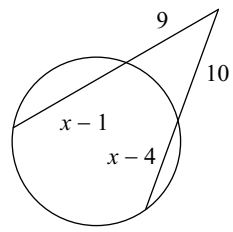
6)



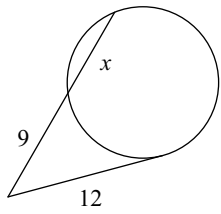
7)



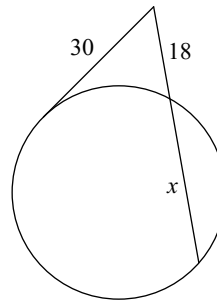
8)



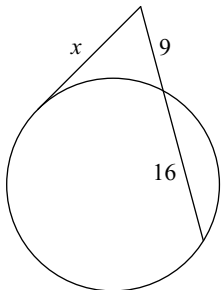
9)



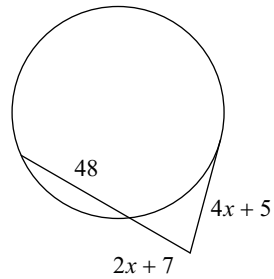
10)



11)



12)



13) A chord is 16 in. long and is 6 in. from the center. Find the length of the radius.

14) A 12 cm chord is 8 cm from the center. Find the length of the radius of the circle.

Answers to Unit 9b Quiz Review (ID: 1)

1) 3
5) 15
9) 7
13)

2) 8
6) 11
10) 32
14)

3) 8
7) 7
11) 15

4) 6
8) 12
12) 10