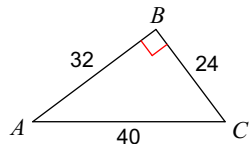


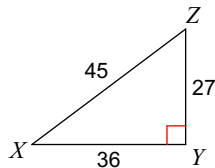
Unit 6 Final Review Fall 2019

Find the value of each trigonometric ratio.

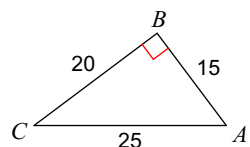
1) $\cos C$



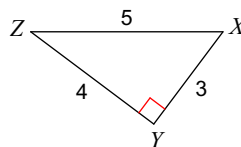
2) $\cos Z$



3) $\tan A$

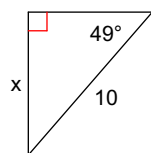


4) $\cos X$

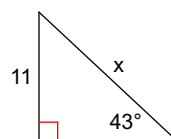


Find the missing side. Round to the nearest tenth.

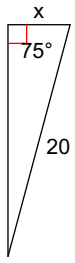
5)



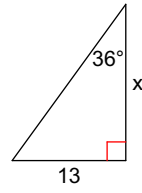
6)



7)

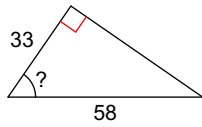


8)

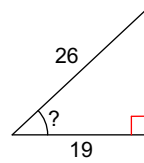


Find the measure of the indicated angle to the nearest degree.

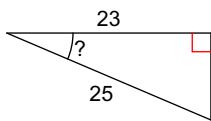
9)



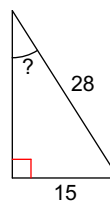
10)



11)



12)



Answers to Unit 6 Final Review Fall 2019 (ID: 1)

1) $\frac{3}{5}$

5) 7.5

9) 55°

2) $\frac{3}{5}$

6) 16.1

10) 43°

3) $\frac{4}{3}$

7) 5.2

11) 23°

4) $\frac{3}{5}$

8) 17.9

12) 32°