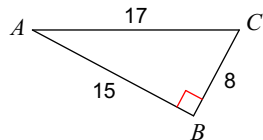


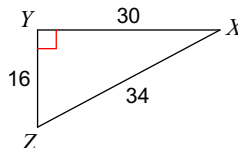
Tangent

Find the value of each trigonometric ratio.

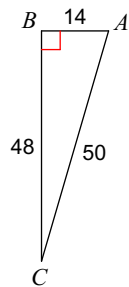
1) $\tan A$



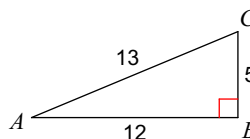
2) $\tan X$



3) $\tan A$

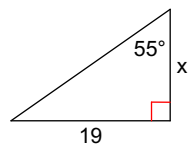


4) $\tan A$

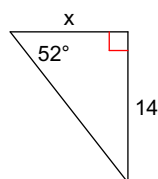


Find the missing side. Round to the nearest tenth.

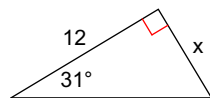
5)



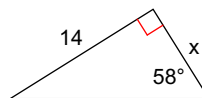
6)



7)



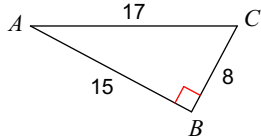
8)



Tangent

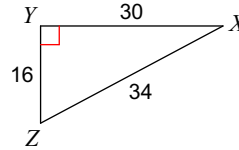
Find the value of each trigonometric ratio.

1) $\tan A$



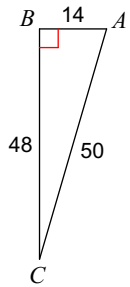
$$\frac{8}{15}$$

2) $\tan X$



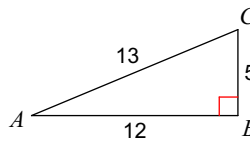
$$\frac{8}{15}$$

3) $\tan A$



$$\frac{24}{7}$$

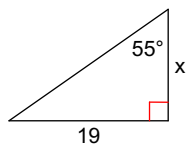
4) $\tan A$



$$\frac{5}{12}$$

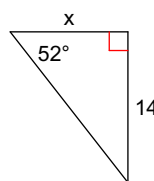
Find the missing side. Round to the nearest tenth.

5)



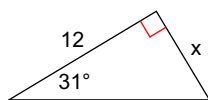
$$13.3$$

6)



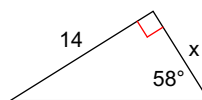
$$10.9$$

7)



$$7.2$$

8)



$$8.7$$