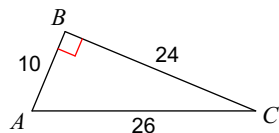


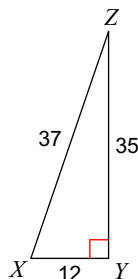
Cosine

Find the value of each trigonometric ratio.

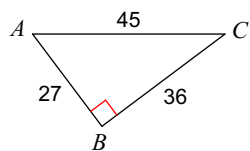
1)  $\cos C$



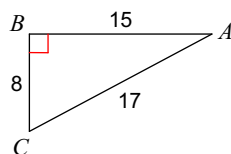
2)  $\cos X$



3)  $\cos C$

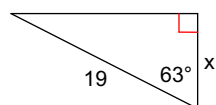


4)  $\cos A$

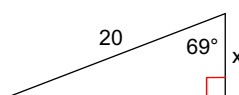


Find the missing side. Round to the nearest tenth.

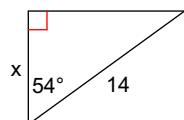
5)



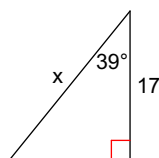
6)



7)



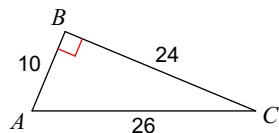
8)



# Cosine

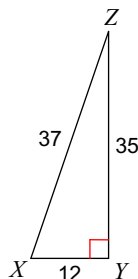
Find the value of each trigonometric ratio.

1)  $\cos C$



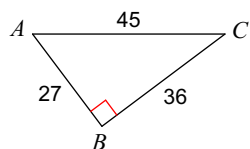
$$\frac{12}{13}$$

2)  $\cos X$



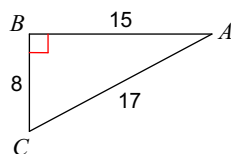
$$\frac{12}{37}$$

3)  $\cos C$



$$\frac{4}{5}$$

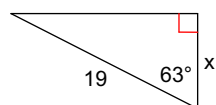
4)  $\cos A$



$$\frac{15}{17}$$

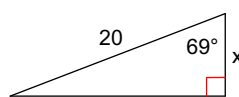
Find the missing side. Round to the nearest tenth.

5)



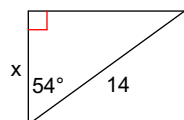
$$8.6$$

6)



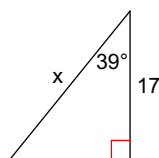
$$7.2$$

7)



$$8.2$$

8)



$$21.9$$