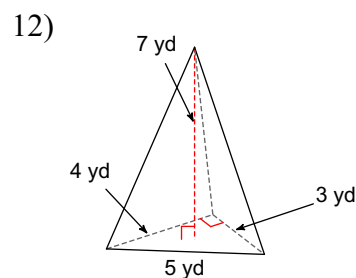
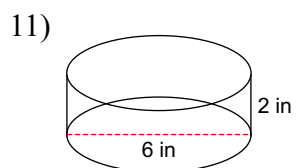
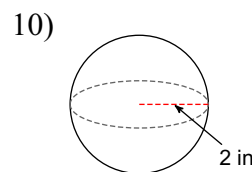
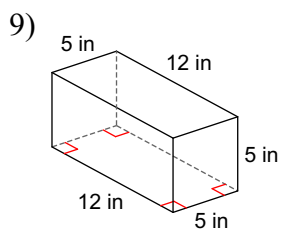
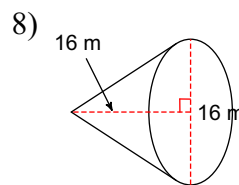
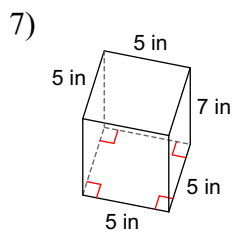
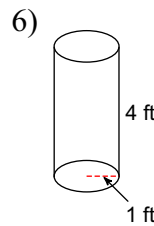
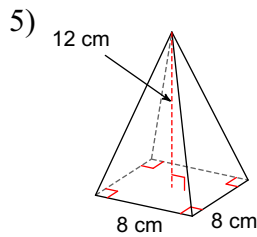
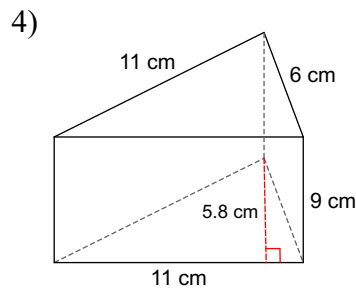
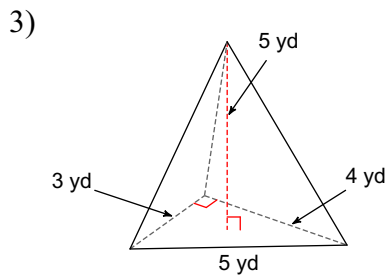
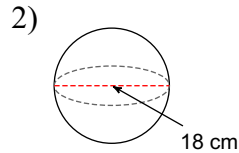
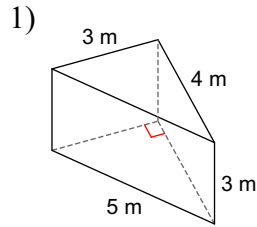


Unit 10 Test Review

Find the volume of each figure. Round your answers to the nearest tenth, if necessary.



Answers to Unit 10 Test Review

1) 18 m^3

5) 256 cm^3

9) 300 in^3

2) 3053.6 cm^3

6) 12.6 ft^3

10) 33.5 in^3

3) 10 yd^3

7) 175 in^3

11) 56.5 in^3

4) 287.1 cm^3

8) 1072.3 m^3

12) 14 yd^3