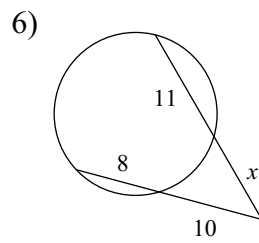
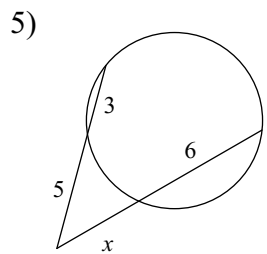
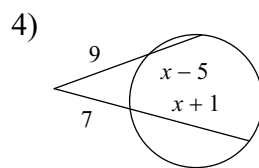
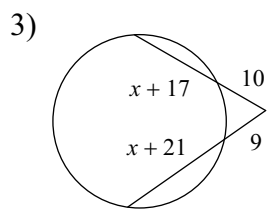
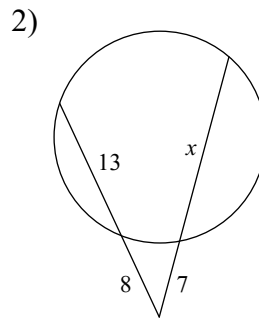
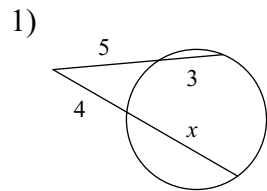
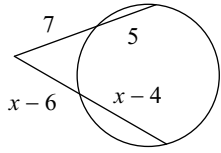


Outside x Whole = Outside x Whole

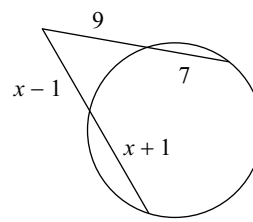
Solve for x . Assume that lines which appear tangent are tangent.



7)

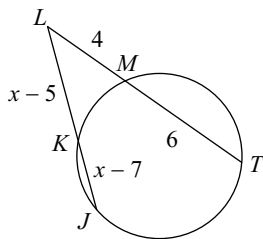


8)

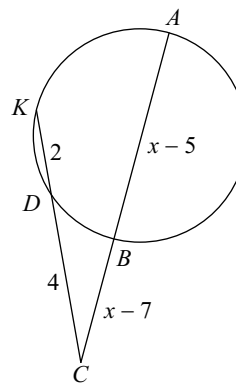


Find the measure of the line segment indicated. Assume that lines which appear tangent are tangent.

9) Find KL



10) Find BC



Answers to Outside x Whole = Outside x Whole (ID: 1)

1) 6
5) 4
9) 5

2) 17
6) 9
10) 3

3) 0
7) 12

4) 10
8) 9