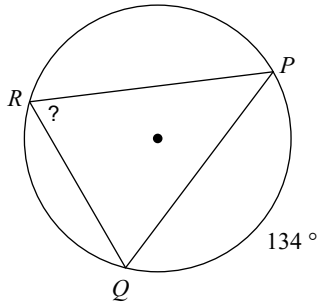


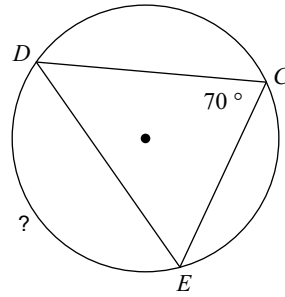
# Inscribed Angles Homework

**Find the measure of the arc or angle indicated.**

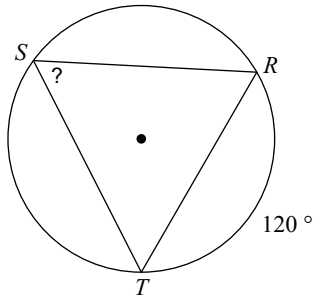
1)



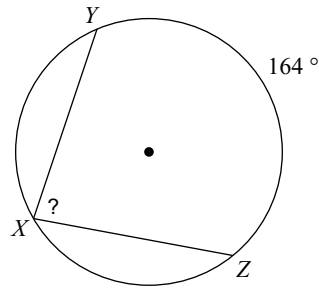
2)



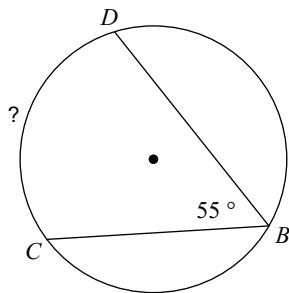
3)



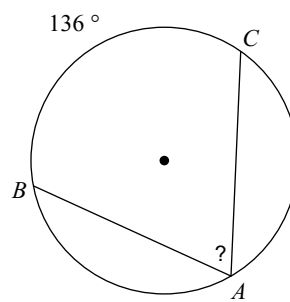
4)



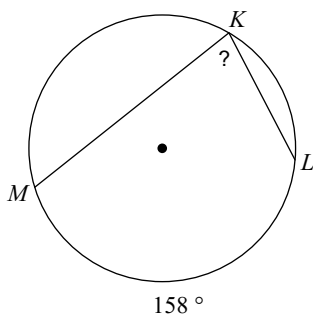
5)



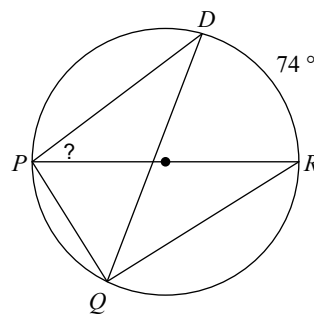
6)



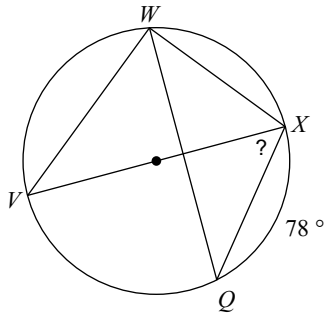
7)



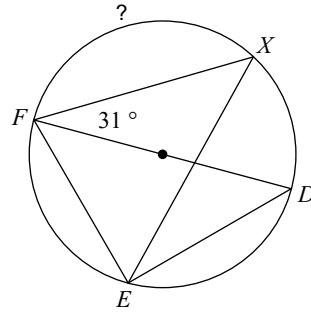
8)



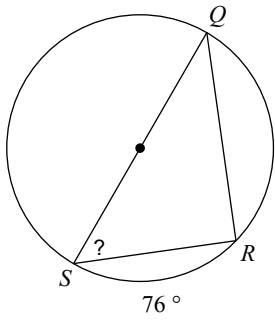
9)



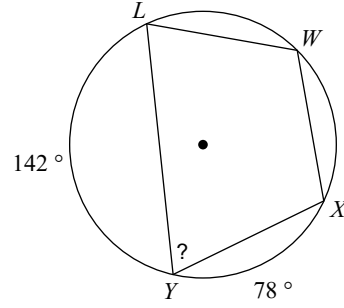
10)



11)

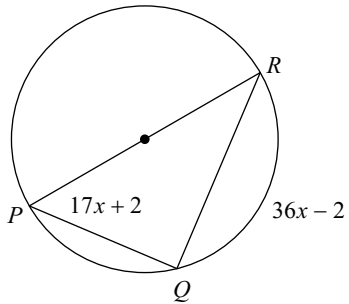


12)

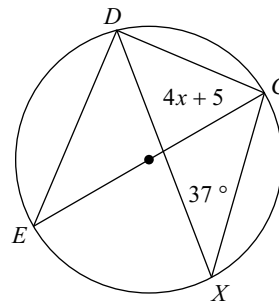


**Solve for  $x$ .**

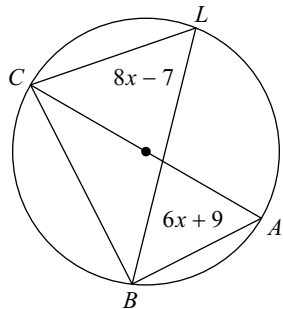
13)



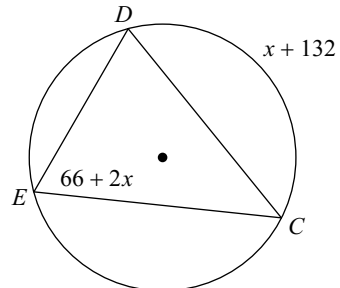
14)



15)



16)



## Answers to Inscribed Angles Homework (ID: 1)

1)  $67^\circ$

2)  $140^\circ$

3)  $60^\circ$

4)  $82^\circ$

5)  $110^\circ$

6)  $68^\circ$

7)  $79^\circ$

8)  $37^\circ$

9)  $51^\circ$

10)  $118^\circ$

11)  $52^\circ$

12)  $70^\circ$

13) 3

14) 12

15) 8

16) 0